

CHAROTAR ENGLISH MEDIUM SCHOOL, ANAND
FIRST TERM EXAM 2018-19

STD: 1

SUB: - MATHS

1 HRS

DATE: 22/10/2018

40 MARKS

NAME: _____ ROLL NO: _____

Q.1 [A] Fill in the blanks. (5)

(1) $6 + 1 = 7$

(6) $7 - 3 = 4$

(2) $9 + 0 = 9$

(7) $6 - 6 = 0$

(3) $5 + 3 + 2 = 10$

(8) $5 - 1 = 4$

(4) $5 + 4 = 9$

(9) $4 - 0 = 4$

(5) $7 + 1 = 8$

(10) $7 + 0 + 2 = 9$

[B] Complete the following and their number name: (5)

a) $67 = \boxed{6}$ tens + $\boxed{7}$ ones = Sixty-seven

b) $96 = \boxed{9}$ tens + $\boxed{6}$ ones = Ninety-six

c) $88 = \boxed{8}$ tens + $\boxed{8}$ ones = Eighty-eight

d) $70 = \boxed{7}$ tens + $\boxed{0}$ ones = Seventy

e) $\boxed{53} = 5$ tens + 3 ones = Fifty-three

[C] Match the following. (4)

Number

Number Names

94

Forty-eight

35

Fifty-two

89

Sixty-eight

77

Thirty-five

12

Eighty-nine

52

Ninety-four

48

Twelve

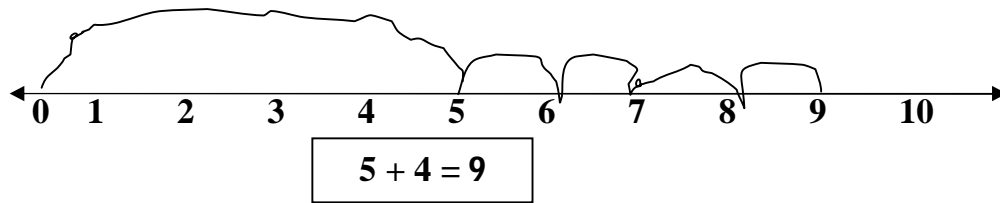
68

Seventy-seven

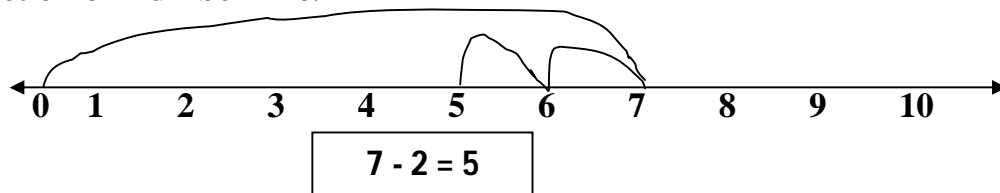
Q.2 Do as directed.

(6)

a) Addition on number line.



b) Subtraction on number line.



c) Arrange in ascending order.

18	15	11	19	13
----	----	----	----	----

11	13	15	18	19
----	----	----	----	----

49	77	91	56	65
----	----	----	----	----

49	56	65	77	91
----	----	----	----	----

d) Arrange in descending order.

50	20	10	40	60
----	----	----	----	----

60	50	40	20	10
----	----	----	----	----

12	36	45	81	27
----	----	----	----	----

81	45	36	27	12
----	----	----	----	----

e) Circle the largest number.

43	22	63	94	71
----	----	----	----	----

79	54	82	25	32
----	----	----	----	----

f) Circle the Smallest number

36	67	52	79	98
----	----	----	----	----

15	72	49	32	46
----	----	----	----	----

Q.3 [A] Use correct sign $>$, $<$ or $=$:

(2)

$$65 \geq 56$$

$$43 \leq 89$$

$$39 \leq 60$$

$$100 = 100$$

[B] What comes just after before?

(2)

48 49

63 64

78 79

89 90

[C] What comes just after?

(2)

55 56

47 48

99 100

61 62

[D] What comes in between?

(2)

53 54 55

67 68 69

78 79 80

45 46 47






[E] Write missing number.

(2)

11  13  15  17  19 

78  80  82  84  86 

43  45  47  49  51 

32  34  36  38  40 

Q.4 [A] Add:

(3)

T	O
2	3
+	1 2
3	5

T	O
4	7
+	3 0
7	7

T	O
①	
6	6
+	2 5
9	1

T	O
①	
2	9
+	2 6
5	5

[B] Subtract:

(3)

T	O
4	8
-	1 8
3	0

T	O
6	7
-	2 5
4	2

T	O
④	①①
5	1
-	2 5
2	6

T	O
②	①⑤
3	5
+	2 9
0	6

Q.5 Story sum:

(4)

1) Amit has 2 marbles. Rajat has 4 marbles.

What is the total number of marbles with them?

$$\begin{array}{r} 4 \\ +2 \\ \hline 6 \end{array}$$

2) Riya has 6 apples. She eats 2 of them. How many apples are left?

$$\begin{array}{r} 6 \\ -2 \\ \hline 4 \end{array}$$