

Std: Jr.KG. -

Marks: /50

Date: 14/10/19

Q - 1. Write missing numbers.

(05)

1 2 3 4 5 6 7 8 9 1011 12 13 14 15 16 17 18 19 20

Q - 2. Tick odd one out.

(05)

3 3 (9) 3 3

4 (8) 4 4 4

6 6 6 6 (9)

5 5 (2) 5 5

9 9 9 (0) 9

Q-3 Write After Numbers.

(05)

3 4

8 9

6 7

4 5


9 10

Q-4 Count and write the Number.


(05)




5



9



12



14




3



7

3

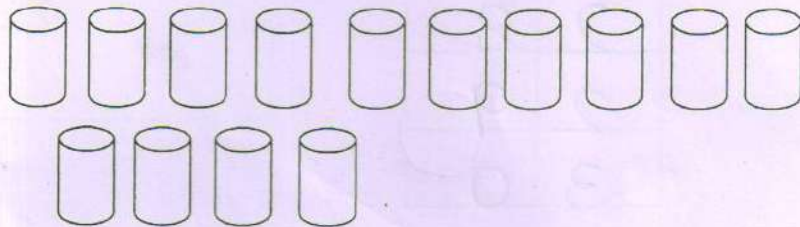
5



8

5

10



12

10

14



5

7

8



8

11

16

Q - 6 Write Number Sequence. (21 to 30)

(05)

2	1
2	2
2	3
2	4
2	5
2	6
2	7
2	8
2	9
3	0

Q - 7 Write Between Numbers.

(05)

13 14 15

6 7 8

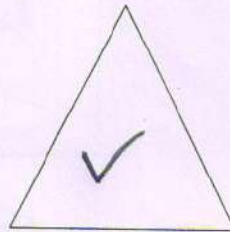

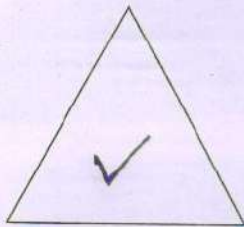

14 15 16

8 9 10

11 12 13

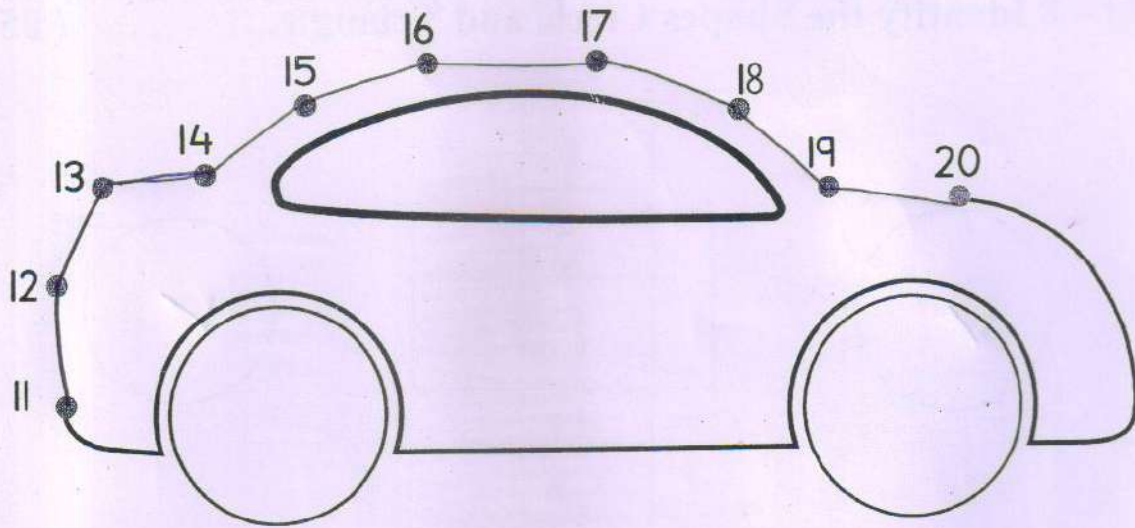
Q – 8 Identify the Shapes Circle and Triangle.

(05)



Q - 9 Trace the Number Drawing.

(05)



Q - 10 Match same Shape Articles.

(05)

